

120° Angle Worksheet - Solved

Question 1

Which type of angle is 120°?

- A. Acute
- B. Obtuse
- C. Reflex
- D. Right

Question 2

120° is an obtuse angle.

Question 3

Which instrument is used to measure angles?

- A. Scale
- B. Divider
- C. Protractor
- D. Compass

Question 4

Half of 120° is _____°.

Question 5

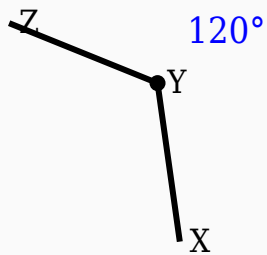
120° is greater than 180°.

Question 6

$$120^\circ + \underline{\hspace{1cm}}^\circ = 180^\circ.$$

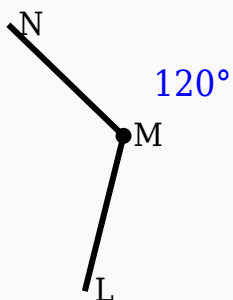
Question 7

Observe the figure and identify the angle.



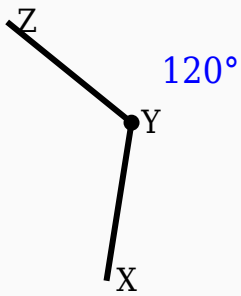
Question 8

Observe the figure and identify the angle.



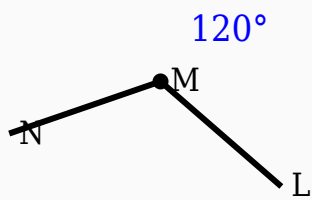
Question 9

Observe the figure and identify the angle.



Question 10

Identify the vertex in the given figure.



Answer Key

Question	Answer
----------	--------

1	Obtuse
2	True
3	Protractor
4	60
5	False
6	60
7	120°
8	120°
9	120°
10	Middle labeled point